



Combined Work Sheet

Class-III

Name:- _____

Father's name: _____

Mother's name: _____

.....
Class Teacher's Signature

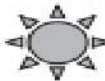



.....
Parent's Signature

Wish you a very Happy Durga Puja

COMPUTER

LOGICAL REASONING


1. If 'day' is called 'night', 'night' is called 'evening', 'evening' is called 'noon', then when do we go to sleep?
 (A) day (B) night (C) noon (D) evening





2. Find the odd one out.
 (A)  (B)  (C)  (D) 





3. There are _____ girls between Shruti and Neha.
 (A) 2 (B) 3 (C) 4 (D) 5



COMPUTERS AND INFORMATION TECHNOLOGY





4. In the MS-Paint toolbox, the  shape tool is used to draw _____.
 (A) Open curves (B) Straight lines only (C) Stars only (D) All of these

5. Which of the following is NOT a part of computer?
 (A)  (B)  (C)  (D) 

6. This is the key which is used to give space after words, alphabets or numbers. If pressed once, it gives the space of one character. It is _____.
 (A)  (B)  (C)  (D) 

7. With the help of a mouse, Raju can _____.
 (A) Point on menus (B) Draw and paint (C) Select multiple items (D) All of these





8. In offices, computers are used to _____.
 (A) Type letters (B) Prepare presentations
 (C) Search information (D) All of these

9. Which of the following keys should be pressed with symbol keys (present at the upper part of the keyboard) in order to type symbols?
 (A)  (B)  (C)  (D) 

10. Click the _____ mouse button twice quickly to _____ the icon, program or document.
 (A) Right, copy (B) Left, open (C) Left, select (D) Right, select





11. What is an App?
 (A) It is an application software.
 (B) It is designed to help the user to perform specific tasks.
 (C) It is available freely or at a nominal price.
 (D) All of these

12. MS-Paint can be used to _____.
 (A) Draw pictures (B) Open images (C) Colour pictures (D) All of these

13. A light-weight and compact machine, capable of doing everything which a desktop computer can do, is _____.
 (A)  (B)  (C)  (D) 

ACHIEVERS SECTION

14. The name of some devices are given in jumbled form. Which of the following statements is CORRECT about all three of them?
 (i) ISJTOCYK (ii) YEBKAODR (iii) OMUES
 (A) (i) is used to enter data into computer while (ii) and (iii) are used to get data from the computer.
 (B) Both (i) and (ii) are used to enter data into computer while (iii) is used to get data from the computer.
 (C) Both (i) and (iii) are used to enter data into the computer while (ii) is used to get data from the computer.
 (D) All three of them are used to enter data into the computer.

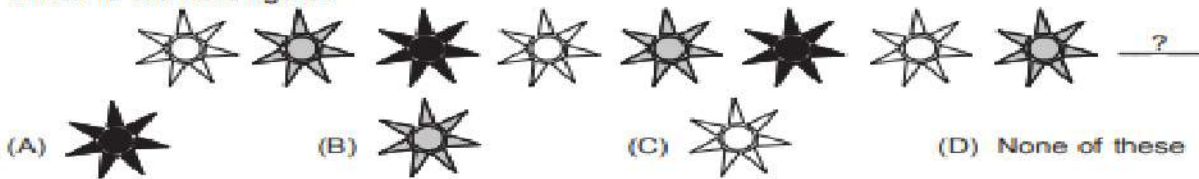
15. Which of the following type of brushes is used to draw the given image in MS-Paint of Windows 7?
 (A)  (B)  (C)  (D) 



SCIENCE

LOGICAL REASONING

1. Which is the next figure?



2. Riya is taller than Sarika, Sarika is taller than Preeti. Who is the shortest among them?

- (A) Riya (B) Sarika
(C) Preeti (D) Can't be determined

3. How many squares are there in the given figure?

- (A) 9 (B) 12
(C) 13 (D) 14



SCIENCE

4. The given figure shows a box containing an object. Kunal put his hand into the box and made the following comments about the object.

- It is cold.
It is rough.
It is hard.

Which sense organ did Kunal use to make these descriptions?

- (A) Ear (B) Skin (C) Tongue (D) Nose



5. My father's nephew or niece is my _____.

- (A) Cousin (B) Uncle (C) Aunt (D) Brother-in-law

6. We wear _____ clothes in winter to keep ourselves warm.

- (A) Cotton (B) Nylon (C) Woollen (D) None of these

7. The stem pulp of the plant shown here is used to make

- (A) Rubber
(B) Gum
(C) Paper
(D) Oil.



8. Which of the following modes of transport does NOT have an engine and is NOT pulled by animals?

- (A) Cycle (B) Tonga (C) Jeep (D) Car

9. To which place of worship do Sikhs go to pray?

- (A) Temple (B) Mosque (C) Church (D) Gurdwara

10. Which of the following yields fibre?

- (A)  Barley (B)  Tea (C)  Cotton (D)  Mustard

11. If you face the rising Sun in the morning, the direction on your left is



- (A) North (B) South (C) East (D) West.

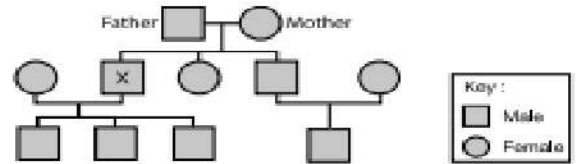
12. Which of the following is NOT the property of air?

- (A) Air fills space. (B) Air gives shape to things.
(C) Air has weight. (D) None of these

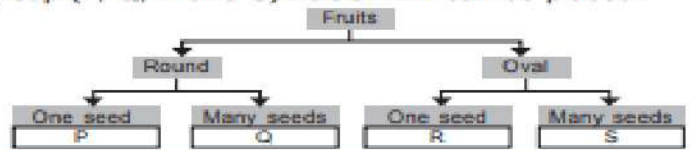
13. Select the correct match from the following.

- (A) Valley - Small low mountain (B) Pond - Still water
(C) Plateau - Small area of high land (D) Ocean - Freshwater

14. Study the given family tree carefully.
How many nephews does 'X' have?
(A) Three
(B) Four
(C) One
(D) None



15. Study the given flow chart carefully. In which group (P, Q, R and S) fruit of kiwi can be placed?
(A) P
(B) Q
(C) R
(D) S



MATHEMATICS

LOGICAL REASONING

1. The number of triangles in the given figure is _____.
(A) 3
(B) 4
(C) 5
(D) 0



2. What will come next in the sequence?




3. When arranged in order from the smallest to the largest, which number will be at last position in the sequence?

- (A) 79 (B) 36 (C) 47 (D) 12

21, 12, 79, 63, 36, 47

4. How many sleeping lines are there in the given figure?

- (A) 2 (B) 5
(C) 4 (D) 6



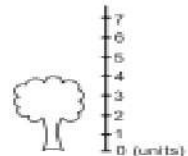
MATHEMATICAL REASONING

5. The largest two digit number is _____.

- (A) 0 1 (B) 1 0 0 (C) 9 0 (D) 9 9

6. The height of the tree is _____.

- (A) 6 units
(B) 4 units
(C) 5 units
(D) 7 units



7. 5 hundreds, 1 ones and 5 tens will make _____.

- (A) 551 (B) 510 (C) 155 (D) 515

8. There are 3 stars on a flag. There are 7 such flags. How many stars are there altogether?



- (A) 20 (B) 21 (C) 28 (D) 27

9. What is the total cost of the given food items?

- (A) ₹ 74
(B) ₹ 84
(C) ₹ 64
(D) ₹ 70



EVERYDAY MATHEMATICS

10. There are 684 students in a school. 297 of them are boys. How many girls are there in the school?
(A) 388 (B) 387 (C) 487 (D) 587

11. Anupriya had ₹ 90. She bought a pair of scissors for ₹ 60. How much amount she has now?
(A) ₹ 30 (B) ₹ 40 (C) ₹ 35 (D) ₹ 25

12. Mrs Tanuja bakes 20 cupcakes. If she packs 4 cupcakes in one box, then how many boxes does she need to pack all the cakes?
(A) 7 (B) 6 (C) 5 (D) 3

13. There are 15 cats, 18 dogs and 13 rats. How many animals are there altogether?

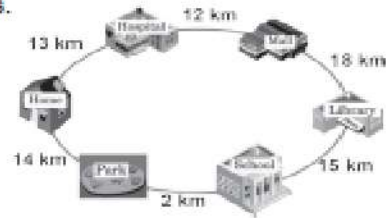
14. Saurabh travelled from his Home to the Library. He took two routes.

1st route : Home → Hospital → Mall → Library

2nd route : Home → Park → School → Library

Which route is the longest and by how much distance?

- (A) 1st route, 12 km
 (B) 1st route, 43 km
 (C) 2nd route, 12 km
 (D) 2nd route, 31 km



15. Identify the 3-digit number.

- (A) 652
 (B) 630
 (C) 952
 (D) 645



- The digit on its ten's place is 3 more than the digit in its one's place.
- The digit in its hundred's place is double the digit in its ten's place.
- The digit in its one's place is (2 tens = 20 ones).

ENGLISH

WORD AND STRUCTURE KNOWLEDGE

1. Choose the odd word out.

- (A) Mouse (B) Sun (C) Squirrel (D) Rat

2. Choose the right spelling.

- (A) Peacock (B) Peecock (C) Picock (D) Peacok

3. Choose the right word for the given picture.

The children are _____.

- (A) dancing
 (B) singing
 (C) playing
 (D) crying



Direction (Q. No. 4 to 7) : Fill in the blanks with the right word.

4. A cat is sitting _____ the table.

- (A) on (B) in (C) into (D) upon

5. I am brown and furry. I am a _____.

- (A) duck (B) bear (C) penguin (D) sparrow

6. He is _____ tall boy.

- (A) an (B) a (C) the (D) few

7. Rita is my friend. _____ is very jolly.

- (A) It (B) They (C) She (D) Her

READING

Direction (Q. No. 8 and 9) : Choose the right sentences.

8. (A) The children are playing with a ball.
 (B) The children are flying kites.
 (C) The children are playing with balloons.
 (D) The children are playing with toy.

9. (A) Ravi has two balloons.
 (B) Rakhi has one balloon.

- (C) Salim has one balloon.
 (D) Salim has two balloons.



Direction (Q. No. 10 and 11) : Read the poetry and answer the following questions.

Something smells good in the kitchen,
 Sugary, spicy and sweet.
 A pudding? A pie? What can it be?
 Mom's making a special treat.
 So I peep into the kitchen
 And as you all can see,
 That sugary, spicy, sweet surprise
 Is a Birthday cake for me!

10. What is mom making in the kitchen?

- (A) A pudding (B) Sugar (C) A Birthday cake (D) A pie

11. What kind of a surprise is it?

- (A) Shocking (B) Sweet (C) Good (D) Bad

Direction (Q. No. 12 and 13) : Choose the correct option.

12. Tom : Jerry! Please have some cheese.

Jerry :

- (A) I am not a teacher, Tom
(C) The train is late, Tom

- (B) Thank you, Tom
(D) You are late

13. Sita was studying in study room.

- (A) There were a lot of books on the table
(C) The garden had many rose plants in it

- (B) The school will start tomorrow
(D) The cat is hiding

ACHIEVERS SECTION

14. Choose the correct word.

Can you lend me _____ money?

- (A) some (B) few (C) little (D) a

15. Choose the best reply.

Your new toy is wonderful _____ I'm sad it's already broken.

- (A) also (B) and (C) but (D) or

