



Combined Work Sheet

Class-I

Name:- _____

Father's name: _____

Mother's name: _____

.....
Class Teacher's Signature

.....
Parent's Signature

Wish you a very Happy Durga Puja

COMPUTER

LOGICAL REASONING

1. Select the odd one out.



2. The 3rd ice-cream from the right end is _____.



(A) N

(B) L

(C) G

(D) O


3. There are _____ groups of 3 cats each can be formed from the given cats.

(A) 2

(B) 3

(C) 4

(D) 1



COMPUTERS AND INFORMATION TECHNOLOGY

4. Which of the following games can be played on a computer?

(A) Racing

(B) Cricket

(C) Basketball

(D) All of these

5. Words and sentences are typed using _____ keys.

(A) Number

(B) Special

(C) Alphabet

(D) Control

6. CPU is called *the brain of the computer*. What does CPU stands for?

(A) Control Processing Unit

(B) Calculations Processing Unit

(C) Central Processing Unit

(D) Computer Processing Unit

7. Computers are _____.

(A) Error prone

(B) Very slow

(C) Easy to use

(D) Difficult to use

8. Pressing and releasing the mouse button means _____.

(A) Typing

(B) Clicking

(C) Hitting

(D) Pushing

9. A computer is a machine which helps us to _____.

(A) Solve sums

(B) Draw pictures

(C) Listen to music

(D) All of these

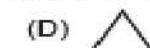
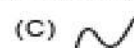
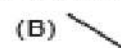

10. To listen to songs on your computer, you should use _____.



11. Which of the following keys when pressed once, capitalizes each letter typed?



12. The tool used to draw straight lines of different thickness, color and length in MS-Paint is _____.



13. A smartphone can be used for _____.

(A) Playing games

(B) Listening music

(C) Video calling

(D) All of these

ACHIEVERS SECTION

14. Which of the following statements is INCORRECT with respect to the given icon of MS-Paint in Windows 7?

(A) It can be used as a Color Picker tool.

(B) It is known as Crayon brush.

(C) It is found under Home tab.

(D) We can change its width while coloring the picture.



15. When does this image appear on the computer screen?

(A) After you click on  button.

(B) After you click on the Shut down button in Start menu.

(C) After you click on the Sleep button in Start menu.

(D) None of these



SCIENCE

LOGICAL REASONING

1. Choose the CORRECT option which will replace the "?" in the given number pattern.

- (A) 1 (B) 3
(C) 4 (D) 5



2. Which item is the heaviest?

- (A) (B) (C) (D)

3. Select the odd one out.

- (A) (B) (C) (D)

SCIENCE

4. Look at the picture and complete the following sentence.
Always cross the road at _____ crossing.

- (A) Horse
(B) Zebra
(C) Footpath
(D) Traffic



5. is a living thing because _____.

- (A) It grows (B) It can make more money plants
(C) It breathes (D) All of these

6. are the seeds of _____.

- (A) Wheat (B) Rice (C) Rajma (D) Corn

7. I am green and small. I can make you cry. I am a _____.

- (A) Pea (B) Chilli (C) Ladyfinger (D) Spinach

8. Unscramble the words given below to get the name of the home of the animal shown in the figure.

'ATSLBE'

- (A) Ebstla (B) Tebsla
(C) Stable (D) Belsta



9. Select the correct option.

- (A) lives in water. (B) cannot fly.
(C) has eight legs. (D) is the largest living animal.

10. Which of the following is NOT a religious festival?

- (A) Eid (B) Gandhi Jayanti (C) Diwali (D) Christmas

11. The picture shows that our house keeps us safe from

- (A) The heat of the Sun
(B) Rain
(C) Cold
(D) Strong winds



12. Which of the following statements is INCORRECT?

- (A) We cannot feel air but we can see it. (B) Moving air is called wind.
(C) Air takes up space. (D) All of these

13. Select the option that arranges these natural water bodies in the decreasing order of their size.

- | | | | |
|------------|-----------|-----------|-------------|
| Ocean
1 | Pond
2 | Lake
3 | Puddle
4 |
|------------|-----------|-----------|-------------|
- (A) 2, 1, 3, 4 (B) 4, 2, 3, 1 (C) 1, 3, 2, 4 (D) 3, 2, 4, 1

ACHIEVERS SECTION

14. Which among the following are creepers?

- (A) 1, 2 and 3
(B) 4 and 5
(C) 1, 4 and 5
(D) 1, 2, 3, 4 and 5



15. Richa did an activity as shown here. She observed bubbles coming out of the glass. What does this activity show?

- (A) The empty glass is filled with air.
(B) Water displaces air in the glass.
(C) Air comes out of the water in the form of bubbles.
(D) All of these



MATHEMATICS

LOGICAL REASONING

- Kanika, Sonali and Sneha are sitting in a row. Kanika is sitting between Sonali and Sneha. Which of the following is the correct order?

(A)	Kanika	Sneha	Sonali
(B)	Kanika	Sonali	Sneha
(C)	Sneha	Kanika	Sonali
(D)	Sneha	Sonali	Kanika
- The shape of is looking like a _____.

(A) Cone (B) Cylinder (C) Sphere (D) Cube
- If is related to in some way, then in the same way is related to _____.

(A) (B) (C) (D)
- Which of the following objects can hold maximum amount of water?

(A) (B) (C) (D)

MATHEMATICAL REASONING

- Which of the following shows a correct descending order?

(A) (B) (C) (D)
- A can jump two steps at a time. If it is at 5th step, then where will it be after 2 jumps?

(A) (B)

(C) (D)
- Four friends are celebrating their birthdays. The candles on cake show their ages. Who is the eldest?

(A) Ankit (B) Parul (C) Ruchi (D) Anu
- Sonali bought the following items.

₹ 10

₹ 2

₹ 5

How much money did she spend?

(A) ₹ 27 (B) ₹ 15 (C) ₹ 12 (D) ₹ 17
- Which toffee gives the answer smaller than 7?

(A) (B) (C) (D)

EVERYDAY MATHEMATICS

- Given two baskets shows the number of apples. Which of the following statements is CORRECT?

(A) Basket X has two more apples than Basket Y.

(B) Basket Y has more apples than Basket X.

(C) Both Baskets X and Y have equal number of apples.

(D) Basket Y has one apple less than Basket X.

Basket X

Basket Y
- A chocolate costs ₹ 25. Jiah has only ₹ 13. How much more money does she need to buy the chocolate?

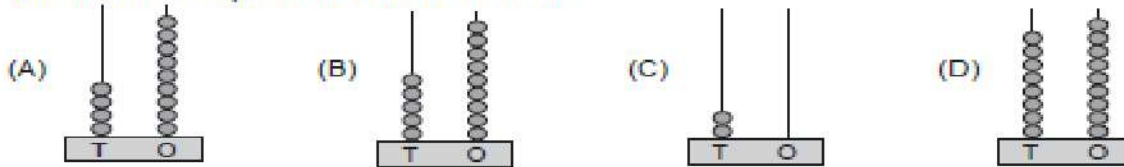
(A) ₹ 10 (B) ₹ 12 (C) ₹ 8 (D) ₹ 11
- Chintu has 24 balls. He gives 2 balls to his sister. How many balls does Chintu has now?

(A) 22 (B) 20 (C) 18 (D) 21
- The total height of both the trees is _____.

(A) 30 m (B) 40 m (C) 50 m (D) 20 m


ACHIEVERS SECTION

14. Which abacus represents 20 less than 69?



15. How many birds are there in the given picture?

- (A) 8 tens – 40 ones
- (B) 2 tens + 18 ones
- (C) 18 ones – 10 ones
- (D) 12 ones + 4 tens



ENGLISH

WORD AND STRUCTURE KNOWLEDGE

1. Choose the odd word out.

- (A) Railway station (B) River (C) Train (D) Bogie

2. Identify the picture.



- (A) Bubble (B) Rainbow (C) Sun (D) Moon

3. Identify the picture and fill in the blanks to form the correct spelling.

BALL_ _N



- (A) BALL U U N
- (B) BALL O O N
- (C) BALL U O N
- (D) BALL O N N

4. Unscramble the letters to form a meaningful word.

Lobw

- (A) Wobl (B) Bowl (C) Oblw (D) Wlbo

5. Identify the verb.

Priyanka goes to school.

- (A) Priyanka (B) Goes (C) School (D) To

Direction (Q. No. 6 and 7) : Choose the right word.

6. The young one of cat is called _____.

- (A) pup (B) kitten (C) cub (D) calf

7. The _____ are going to the school.

- (A) child (B) children (C) childrens (D) childs

READING

Direction (Q. No. 8 to 11) : For the given picture, answer the following questions.



8. My name is Maria. I am a _____.

- (A) maid (B) teacher
(C) nurse (D) police

9. I am usually found in _____.

- (A) hospitals (B) police stations
(C) zoo (D) market

10. I take care of the _____.

- (A) gardens (B) patients (C) teachers (D) animals

11. I give _____ to my patients.

- (A) medicines (B) food (C) homework (D) work

SPOKEN AND WRITTEN EXPRESSION

Direction (Q. No. 12 and 13) : Choose the correct option.

12. Akahay : Hello! How's everything?

Ankush : _____.

- (A) Sure. (B) Nothing much.
(C) Fine, thanks. How about you? (D) How should I know?

13. Ali lived in a house with a large garden.

- (A) There were a lot of books on the table (B) The school will start tomorrow
(C) The garden had many rose plants in it (D) The picnic was good

ACHIEVERS SECTION

14. Choose the correct option.

It's very pleasant in the city. So, _____ friends visit him.

- (A) an (B) many (C) few (D) much

15. Choose the best reply.

Where do you want to have lunch today?

- (A) Somewhere is fine. (B) Everywhere is fine.
(C) Anywhere is fine. (D) Thank you.

